




**Year 12 Biology**  
**Worksheet 1 – April, 2021**

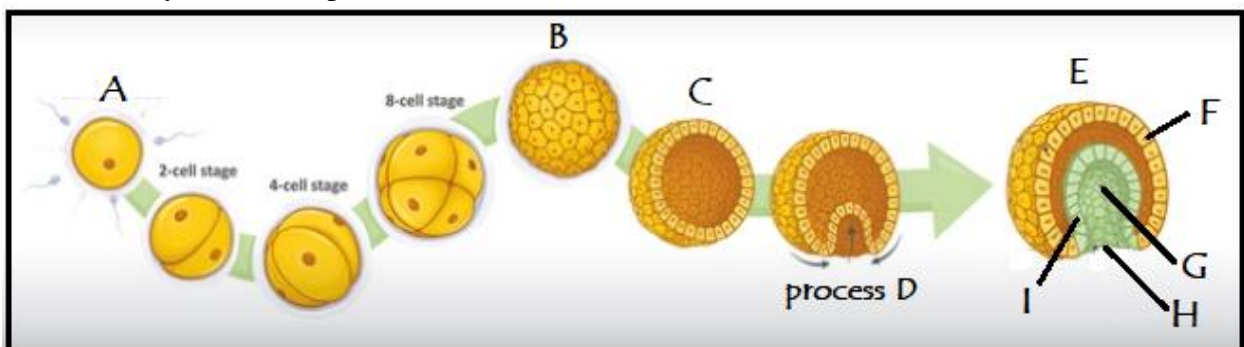
**Embryonic Development**

1. Define the following terms. Your definition should include where these processes take place and what is the end product of each process (where possible).
  - a. Fertilization
  - b. Cleavage
  - c. Gastrulation
  - d. Implantation
  
2. Complete the table by writing the correct information in the spaces (i. to viii) provided.

Stage	Diagram	Definition/feature
(i)		(ii)
Process X (iii)		(iv)
(v)		(vi)
(vii)		(viii)

Source of diagrams: <https://slideplayer.com/slide/6363866/>

3. Identify/name the parts of the diagram (A-I) that shows the different stages of embryonic development.



Source: <https://www.shutterstock.com/search/blastula>

**The End**